

GREENHILL PRIMARY SCHOOLS

JOINT PRE-PLE (SET II)

TERM III 2022

SOCIAL STUDIES WITH RELIGIOUS EDUCATION

Time allowed: 2 hours 15 minutes

Personal No.		

Candidates Name:.....

Candidates Signature:

District

Campus: Stream:

Read the following instructions carefully.

1. This paper is made up of two Sections: A and B.
2. Answers to both sections must be written in the spaces provided in full sentences.
3. Section A has 40 questions (40 marks)
4. Section B has 15 questions (60 marks)
5. Attempt all questions. All answers to both sections A and B must be written in the spaces provided.
6. All answers must be written in blue or black ballpoint pen or ink but not in pencil. All work done in pencil, except diagrams, will NOT be marked.
7. Crossing out of answers will lead to loss of marks.
8. Any handwriting that cannot be easily read may lead to loss of marks.

FOR EXAMINERS USE ONLY		
QN. NO.	MARK	SIGN
1 - 10		
11 - 20		
21 - 30		
31 - 40		
41 - 43		
44 - 46		
47 - 49		
50 - 52		
53 - 55		

SECTION A

1. Name the tool used by pilots to find direction of places.

.....


2. State any **one** cause of landslides in East Africa today.

.....

3. State any **one** importance of fencing a school.

.....

4. Draw a map symbol of a marsh in the space below.



5. What name is given to the representation of an object as seen from sides?

.....

6. How is the sergeant at arms important in the Ugandan parliament?

.....

7. Name the largest landlocked country that neighbour Uganda.

.....

8. State any **one** reason why many people prefer building their houses near main roads.

.....

9. Name the East African country which was not colonized by Britain but is a member of Commonwealth of Nations.

.....

10. Which UN organ is in charge of the United Nations Agencies?
.....
11. Name the body set up by the government to manage forests in Uganda.
.....
12. Give any **one** factor that has increased child labour in our community.
.....
13. Why did the powers of traditional leaders in Uganda reduce after 1894?
.....
14. Name the town in West Africa, which is crossed by longitude 0° .
.....
15. Why is it necessary for every child to belong to a family?
.....
16. Who were the founders of Bunyoro-Kitara kingdom?
.....
17. How do Pandemic diseases negatively affect the economy of a country?
.....
18. State any **one** political reason for the collapse of the East African Community in 1977.
.....
.....
19. Give any **one** way mobile phones have helped people to easily meet their needs.
.....
20. Give any **one** reason why a family should save money.

21. How does the traffic road sign below help road users?



.....

22. Why do monkeys prefer to live in forests?

.....

23. Which feature on the Uganda coat of arms represents the source of river Nile?

.....

24. Why is Bagamoyo remembered in the exploration history of East Africa?

.....

25. State any **one** reason why colonialists signed agreements with the natives in Uganda.

.....

26. Nuwahaire was going to school in the morning when she saw her shadow on her left hand side. In which direction was she going?

.....

.....

27. State any **one** reason why the blacks hated white settler in Africa.

.....

28. Why do wind ward sides of highlands receive a lot of rainfall?

.....

29. How are large and strong eyelids important to a camel?

.....

30. Name any **one** feature that forms a boundary between Uganda and Tanzania.
.....
31. State any **one** factor that forces colonialists to grant Africans their independence.
.....
32. What is the law making organ of East African Community known as?
.....
33. State any **one** way a capital city is important in a country.
.....
34. Give any **one** way wars cause famine in an area.
.....
35. Name the irrigation scheme which is located in Kasese district.
.....

For Questions 36 - 40 Answer Either A Christian Or Islamic Question But Not Both Alternatives Per Number.

36. **Either:-** Who was the mother of John the Baptist?
.....
- Or:** Who was the mother of prophet Isa?
.....
37. **Either :** Why do Christians humble themselves during prayer?
.....
- Or:** Why do Muslims humble themselves during salat?
.....
38. **Either:** Why is man regarded as the summit of God's creation?
.....
- Or:** Why is man regarded as the summit of Allah's creation?

39. **Either:** Name the son of Adam and Eve who was born to replace Abel?

.....

Or:- Name the son of Adam and Hawa who was punished by Allah?

.....

40. **Either:** Name the Holy place of worship for Christians.

.....

Or: Name the Holy place of worship for Muslims.

.....

SECTION B: 60 MARKS

Questions 41 to 55 carry four marks each.

41. (a) Name any **two** services a community expects the government to provide for them.

(i)

(ii)

(b) Give any **two** challenges newly created districts face when delivering social services to people.

(i).....

(ii).....

42. (a) Give any **two** ways of attracting many foreign tourists in a country.

(i).....

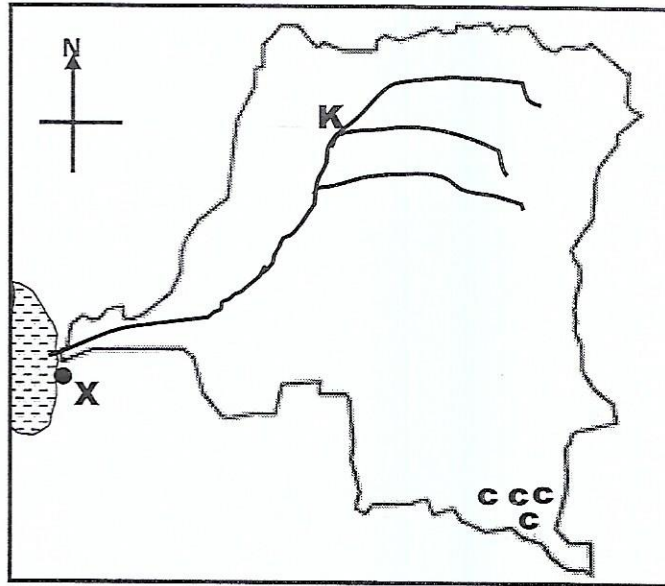
(ii).....

(b) How do local people near tourist attractions benefit from tourists?

.....

(c) State any **one** factor that can reduce the number of foreign tourists in a country.

43. Study the sketch map of Democratic republic of Congo below and use it to answer questions that follow.



(a) Name the feature marked K.

.....

(b) How is area marked ccc economically important to DRC?

.....

(c) Name the seaport marked X.

.....

(d) Why is road construction difficult in DRC?

.....

44. (a) Mention any **two** examples of written records as sources of history.

(i).....

(ii).....

(b) Give any **two** importance of customs in our society.

(i)

(ii)

45. (a) State any two ways families can protect their property from thieves.

(i)

(ii)

(b) Why is sharing encouraged at home?

(i)

(ii)

46. Complete the table below correctly.

River	Dam	Country
River Nile	Isimba dam	(i).....
River Zambezi	Kariba dam	(ii).....
(iii).....	(iv).....	Nigeria

47. (a) Which cash crop was introduced by Arabs at Zanzibar Island ?

.....

(b) Give one use of the above crop in (a) above.

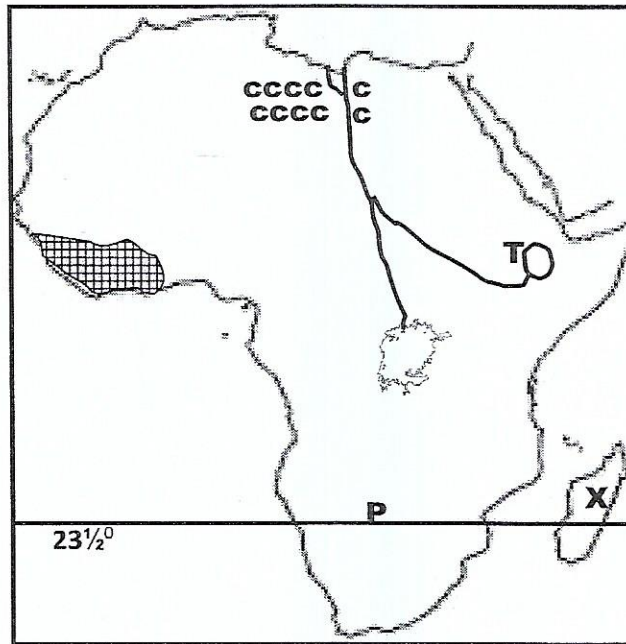
.....

(c) Write any two problems faced by the people of Zanzibar.

(i)

(ii)

48. Study the sketch map of Africa below and use it to answer questions that follow.



(a) Name;

(i) feature marked T

(ii) imaginary line marked P

(b) Why was area marked ccc visited by few European explorers?

.....

(c) Name the country marked X.

.....

49. (a) Apart from dogs, name any other animal early man tamed?

.....

(b) How did early man make fire?

.....

(c) In which way did fire increase early man's security?

.....

(d) How are places where early man settled important today?

.....

50. (a) Name any **two** member countries of East African community which are crossed by the Equator.
- (i)
- (ii)
- (b) Give any **two** ways landlocked countries solve challenges they face during international trade.
- (i)
- (ii)

For Questions 51 - 55. Answer Either A Christian Question Or Islamic Question But Not Both Alternatives per Number.

51. **Either:-**

- (a) Give any **two** reasons why Christians give offertory in church.
- (i)
- (ii)
- (b) State any **one** reason why ordained church leaders pray for offertory Christians given in church.
-
-
- (c) Give any **one** way the church gives free services to the people in the community.
-

Or:

- (a) Give any **two** reasons why Muslims offer zakat in the mosque.
- (i)
- (ii)

(b) Give any **two** ways the Muslims community offers free services to people in the community.

(i)

(ii)

52. **Either:-** (a) What was the occupation of Moses before God's call?

.....

(b) Where was Moses when God first called him?

.....

(c) Why did God give Moses the Ten commandment?

.....

(d) Give any **one** reason why Moses failed to reach Canaan.

.....

Or: (a) What was the work of Musa before Allah's call?

.....

(b) Which group of people did Musa lead?

.....

(c) Give any **two** reasons why Allah revealed the Tauret to prophet Musa.

(i)

(ii)

53. **Either:-**

(a) Who was the king of Judea at the time of the birth of Jesus Christ?

.....

(b) What showed the wise men where baby Jesus was born?

.....

(c) Mention any **two** presents that were brought to Jesus Christ by the wise men.

(i)

(ii)

Or:-

(a) Who was the first person to be converted to Islam?

.....

(b) Who converted the person named in (a) above to Islam?

.....

(c) Mention any **two** rewards Muslim converts who truly believes in Allah enjoy.

(i).....

(ii).....

54. Either:

(a) Who brings true source of happiness in the world?

.....

(b) Why is happiness on earth not long lasting?

.....

(c) Give any **one** reason why Jesus Christ accepted to be baptized yet he was the son of God.

.....

(d) State any **one** thing a Christian can do to live a happy life.

.....

Or:-

(a) Who brings true happiness to Muslims in the world?

(b) Why is happiness on earth not long lasting?

.....

(c) Mention any **two** things a muslim can do to live a happy life.

(i)

(ii)

55. Either :**"My father, if it is possible take this cup of suffering from me!**

(a) Who said these words?

.....

(b) Why did the person above say those words?

.....

(c) Mention any **two** reasons why Christians should pray before going to bed.

(i)

(ii)

Or:- **"Say I seek refuge in Allah the Lord of the day break.....)(Surah 113)**

(a) What is the name if the above Surah?

.....

(b) Give any **one** request made by Muslims in the above Surah.

.....

(c) Mention any **two** reasons why Muslims should pray at night before going to bed.

(ii)

(iii)